


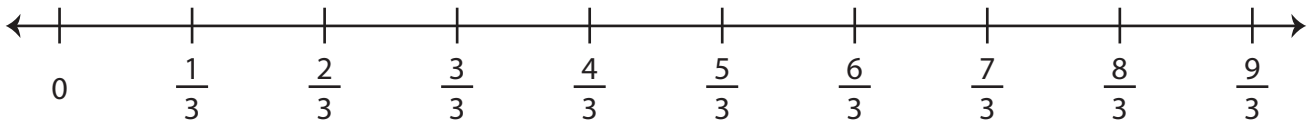
Ordering Fractions

A) Plot the fractions on the number line, and write them in increasing order.

1) $\frac{8}{5}, \frac{2}{5}, \frac{6}{5}, \frac{3}{5}$

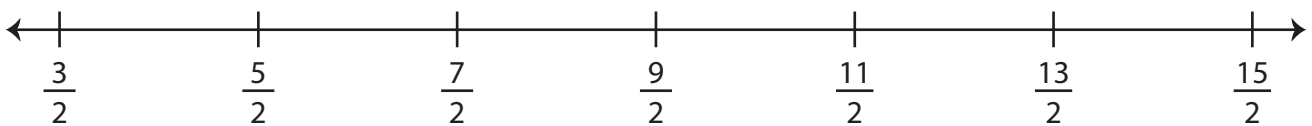


2) $\frac{4}{3}, \frac{7}{3}, \frac{1}{3}, \frac{5}{3}$



B) Plot the fractions on the number line, and write them in decreasing order.

1) $\frac{13}{2}, \frac{9}{2}, \frac{15}{2}, \frac{5}{2}$



2) $5\frac{1}{8}, 4\frac{3}{8}, 5\frac{5}{8}, 4\frac{7}{8}$

