

Chemistry

SECTION 1 (Maximum Marks: 12)

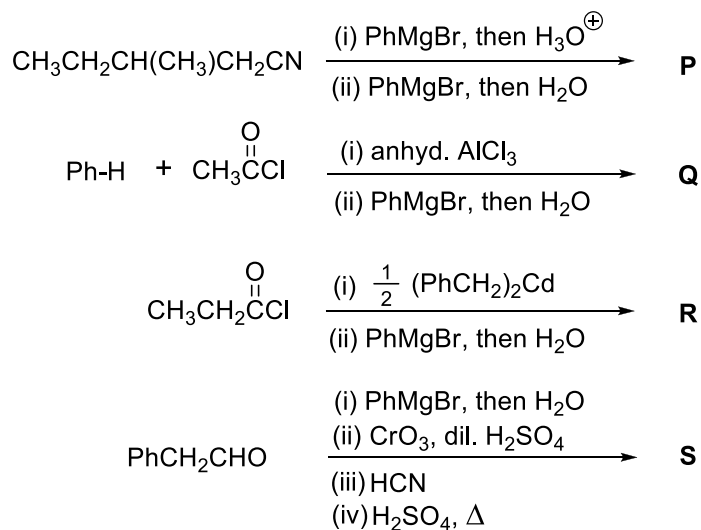
- This section contains **THREE (03)** questions.
- Each question has **FOUR** options (A), (B), (C) and (D). **ONE OR MORE THAN ONE** of these four option(s) is(are) correct answer(s).
- For each question, choose the option(s) corresponding to (all) the correct answer(s).
- Answer to each question will be evaluated according to the following marking scheme:
 - Full Marks* : +4 **ONLY** if (all) the correct option(s) is(are) chosen;
 - Partial Marks* : +3 If all the four options are correct but **ONLY** three options are chosen;
 - Partial Marks* : +2 If three or more options are correct but **ONLY** two options are chosen, both of which are correct;
 - Partial Marks* : +1 If two or more options are correct but **ONLY** one option is chosen and it is a correct option;
 - Zero Marks* : 0 If none of the options is chosen (i.e. the question is unanswered);
 - Negative Marks* : -2 In all other cases.
- For example, in a question, if (A), (B) and (D) are the **ONLY** three options corresponding to correct answers, then
 - choosing **ONLY** (A), (B) and (D) will get +4 marks;
 - choosing **ONLY** (A) and (B) will get +2 marks;
 - choosing **ONLY** (A) and (D) will get +2 marks;
 - choosing **ONLY** (B) and (D) will get +2 marks;
 - choosing **ONLY** (A) will get +1 mark;
 - choosing **ONLY** (B) will get +1 mark;
 - choosing **ONLY** (D) will get +1 mark;
 - choosing no option (i.e. the question is unanswered) will get 0 marks; and
 - choosing any other combination of options will get -2 marks.

Q.1 The correct statement(s) related to processes involved in the extraction of metals is(are)

- (A) Roasting of Malachite produces Cuprite.
- (B) Calcination of Calamine produces Zincite.
- (C) Copper pyrites is heated with silica in a reverberatory furnace to remove iron.
- (D) Impure silver is treated with aqueous KCN in the presence of oxygen followed by reduction with zinc metal.

Answer: B, C, D

Q.2 In the following reactions, **P**, **Q**, **R**, and **S** are the major products.

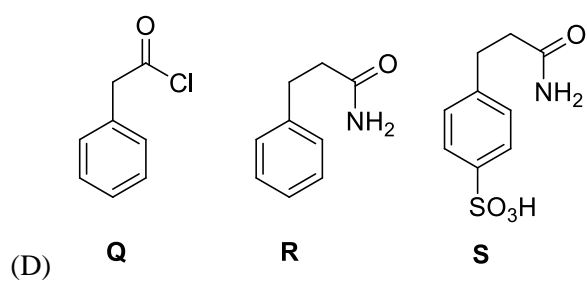
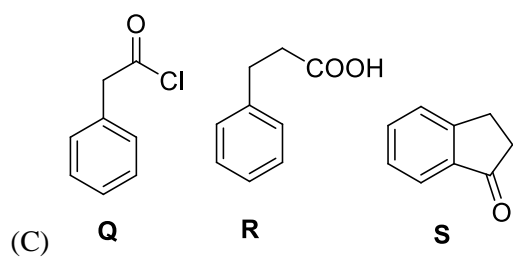
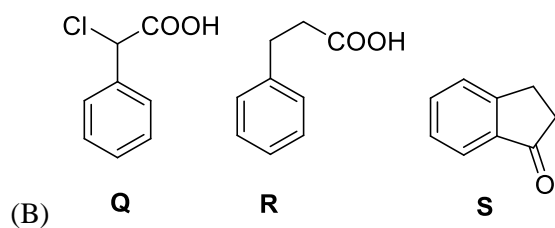
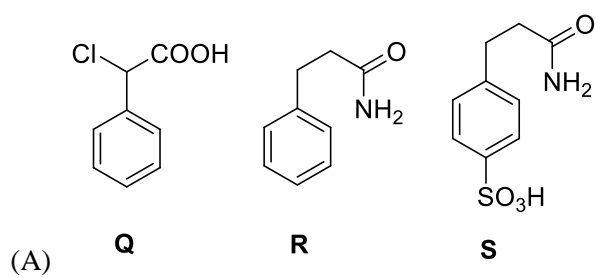
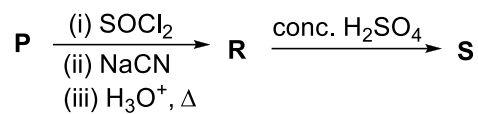
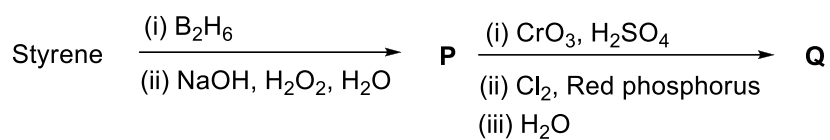


The correct statement(s) about **P**, **Q**, **R**, and **S** is(are)

- (A) Both **P** and **Q** have asymmetric carbon(s).
 (B) Both **Q** and **R** have asymmetric carbon(s).
 (C) Both **P** and **R** have asymmetric carbon(s).
 (D) **P** has asymmetric carbon(s), **S** does **not** have any asymmetric carbon.

Answer: C, D

Q.3 Consider the following reaction scheme and choose the correct option(s) for the major products **Q**, **R** and **S**.

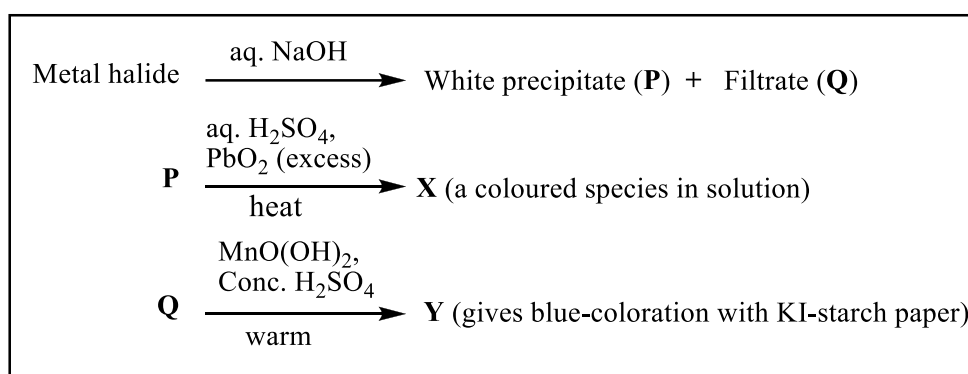


Answer: B

SECTION 2 (Maximum Marks: 12)

- This section contains **FOUR (04)** questions.
- Each question has **FOUR** options (A), (B), (C) and (D). **ONLY ONE** of these four options is the correct answer.
- For each question, choose the option corresponding to the correct answer.
- Answer to each question will be evaluated according to the following marking scheme:
Full Marks : +3 If **ONLY** the correct option is chosen;
Zero Marks : 0 If none of the options is chosen (i.e. the question is unanswered);
Negative Marks : -1 In all other cases.

Q.4 In the scheme given below, **X** and **Y**, respectively, are



- (A) CrO_4^{2-} and Br_2
 (B) MnO_4^{2-} and Cl_2
 (C) MnO_4^- and Cl_2
 (D) MnSO_4 and HOCl

Answer: C

Q.5 Plotting $1/\Lambda_m$ against $c\Lambda_m$ for aqueous solutions of a monobasic weak acid (HX) resulted in a straight line with y-axis intercept of P and slope of S. The ratio P/S is

$[\Lambda_m = \text{molar conductivity}$
 $\Lambda_m^\circ = \text{limiting molar conductivity}$
 $c = \text{molar concentration}$
 $K_a = \text{dissociation constant of HX}]$

- (A) $K_a \Lambda_m^\circ$
 (B) $K_a \Lambda_m^\circ / 2$
 (C) $2 K_a \Lambda_m^\circ$
 (D) $1 / (K_a \Lambda_m^\circ)$

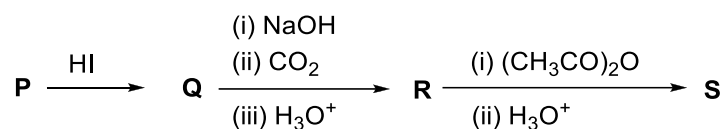
Answer: A

Q.6 On decreasing the pH from 7 to 2, the solubility of a sparingly soluble salt (MX) of a weak acid (HX) increased from $10^{-4} \text{ mol L}^{-1}$ to $10^{-3} \text{ mol L}^{-1}$. The pK_a of HX is

- (A) 3
- (B) 4
- (C) 5
- (D) 2

Answer: B

Q.7 In the given reaction scheme, **P** is a phenyl alkyl ether, **Q** is an aromatic compound; **R** and **S** are the major products.



The correct statement about **S** is

- (A) It primarily inhibits noradrenaline degrading enzymes.
- (B) It inhibits the synthesis of prostaglandin.
- (C) It is a narcotic drug.
- (D) It is *ortho*-acetylbenzoic acid.

Answer: B

SECTION 3 (Maximum Marks: 24)

- This section contains **SIX (06)** questions.
- The answer to each question is a **NON-NEGATIVE INTEGER**.
- For each question, enter the correct integer corresponding to the answer using the mouse and the on-screen virtual numeric keypad in the place designated to enter the answer.
- Answer to each question will be evaluated according to the following marking scheme:
Full Marks : +4 If **ONLY** the correct integer is entered;
Zero Marks : 0 In all other cases.

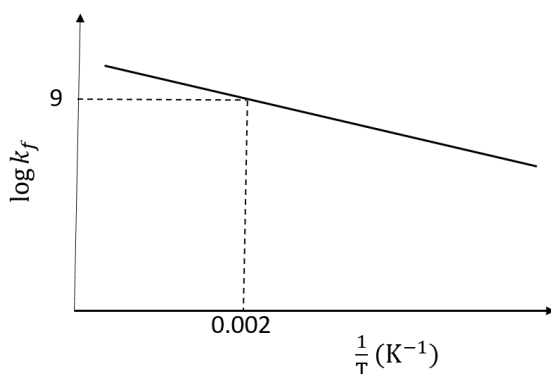
Q.8 The stoichiometric reaction of 516 g of dimethyldichlorosilane with water results in a tetrameric cyclic product **X** in 75% yield. The weight (in g) of **X** obtained is [222](#).

[Use, molar mass (g mol^{-1}): H = 1, C = 12, O = 16, Si = 28, Cl = 35.5]

Q.9 A gas has a compressibility factor of 0.5 and a molar volume of $0.4 \text{ dm}^3 \text{ mol}^{-1}$ at a temperature of 800 K and pressure x atm. If it shows ideal gas behaviour at the same temperature and pressure, the molar volume will be $y \text{ dm}^3 \text{ mol}^{-1}$. The value of x/y is [100](#).

[Use: Gas constant, $R = 8 \times 10^{-2} \text{ L atm K}^{-1} \text{ mol}^{-1}$]

Q.10 The plot of $\log k_f$ versus $1/T$ for a reversible reaction $A(g) \rightleftharpoons P(g)$ is shown.



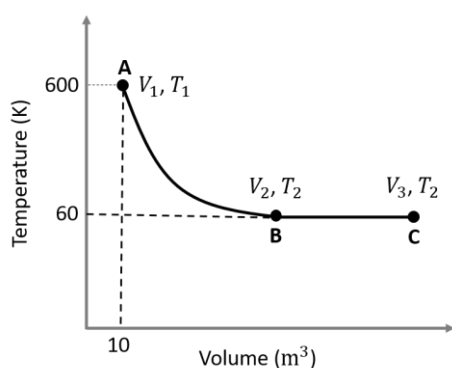
Pre-exponential factors for the forward and backward reactions are 10^{15} s^{-1} and 10^{11} s^{-1} , respectively. If the value of $\log K$ for the reaction at 500 K is 6, the value of $|\log k_b|$ at 250 K is 5.

[K = equilibrium constant of the reaction

k_f = rate constant of forward reaction

k_b = rate constant of backward reaction]

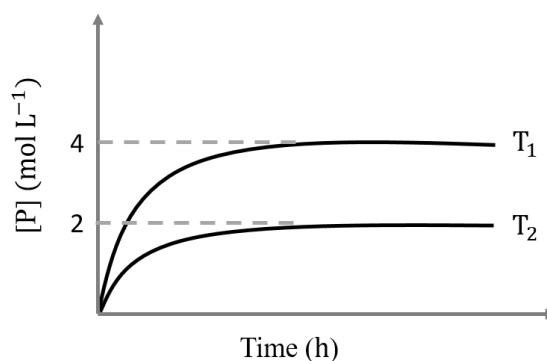
Q.11 One mole of an ideal monoatomic gas undergoes two reversible processes ($A \rightarrow B$ and $B \rightarrow C$) as shown in the given figure:



$A \rightarrow B$ is an adiabatic process. If the total heat absorbed in the entire process ($A \rightarrow B$ and $B \rightarrow C$) is $RT_2 \ln 10$, the value of $2 \log V_3$ is 7.

[Use, molar heat capacity of the gas at constant pressure, $C_{p,m} = \frac{5}{2}R$]

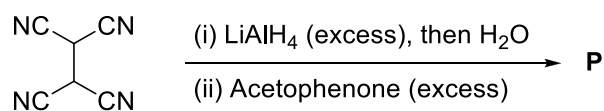
- Q.12 In a one-litre flask, 6 moles of A undergoes the reaction $A(g) \rightleftharpoons P(g)$. The progress of product formation at two temperatures (in Kelvin), T_1 and T_2 , is shown in the figure:



If $T_1 = 2T_2$ and $(\Delta G_2^\ominus - \Delta G_1^\ominus) = RT_2 \ln x$, then the value of x is 8.

[ΔG_1^\ominus and ΔG_2^\ominus are standard Gibb's free energy change for the reaction at temperatures T_1 and T_2 , respectively.]

- Q.13 The total number of sp^2 hybridised carbon atoms in the major product **P** (a non-heterocyclic compound) of the following reaction is 28.



SECTION 4 (Maximum Marks: 12)

- This section contains **FOUR (04)** Matching List Sets.
- Each set has **ONE** Multiple Choice Question.
- Each set has **TWO** lists: **List-I** and **List-II**.
- **List-I** has **Four** entries (P), (Q), (R) and (S) and **List-II** has **Five** entries (1), (2), (3), (4) and (5).
- **FOUR** options are given in each Multiple Choice Question based on **List-I** and **List-II** and **ONLY ONE** of these four options satisfies the condition asked in the Multiple Choice Question.
- Answer to each question will be evaluated according to the following marking scheme:
Full Marks : +3 **ONLY** if the option corresponding to the correct combination is chosen;
Zero Marks : 0 If none of the options is chosen (i.e. the question is unanswered);
Negative Marks : -1 In all other cases.

Q.14 Match the reactions (in the given stoichiometry of the reactants) in List-I with one of their products given in List-II and choose the correct option.

List-I

- (P) $\text{P}_2\text{O}_3 + 3\text{H}_2\text{O} \rightarrow$
(Q) $\text{P}_4 + 3\text{NaOH} + 3\text{H}_2\text{O} \rightarrow$
(R) $\text{PCl}_5 + \text{CH}_3\text{COOH} \rightarrow$
(S) $\text{H}_3\text{PO}_2 + 2\text{H}_2\text{O} + 4\text{AgNO}_3 \rightarrow$

List-II

- (1) $\text{P(O)(OCH}_3\text{)Cl}_2$
(2) H_3PO_3
(3) PH_3
(4) POCl_3
(5) H_3PO_4

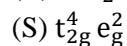
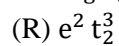
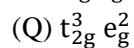
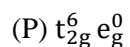
- (A) P \rightarrow 2; Q \rightarrow 3; R \rightarrow 1; S \rightarrow 5
(B) P \rightarrow 3; Q \rightarrow 5; R \rightarrow 4; S \rightarrow 2
(C) P \rightarrow 5; Q \rightarrow 2; R \rightarrow 1; S \rightarrow 3
(D) P \rightarrow 2; Q \rightarrow 3; R \rightarrow 4; S \rightarrow 5

Answer: D

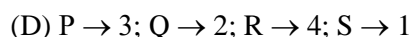
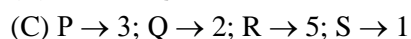
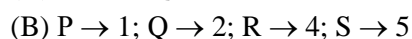

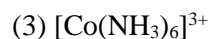
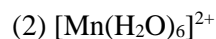
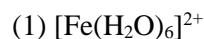
Q.15 Match the electronic configurations in List-I with appropriate metal complex ions in List-II and choose the correct option.

[Atomic Number: Fe = 26, Mn = 25, Co = 27]

List-I



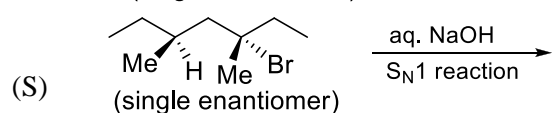
List-II



Answer: D

Q.16 Match the reactions in List-I with the features of their products in List-II and choose the correct option.

List-I



List-II

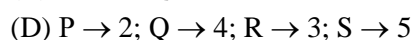
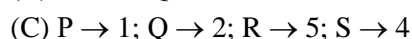
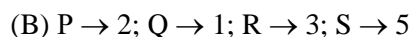
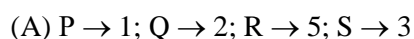
(1) Inversion of configuration

(2) Retention of configuration

(3) Mixture of enantiomers

(4) Mixture of structural isomers

(5) Mixture of diastereomers



Answer: B

Q.17 The major products obtained from the reactions in List-II are the reactants for the named reactions mentioned in List-I. Match List-I with List-II and choose the correct option.

List-I

(P) Etard reaction

(Q) Gattermann reaction

(R) Gattermann-Koch reaction

(S) Rosenmund reduction

List-II(1) Acetophenone $\xrightarrow{\text{Zn-Hg, HCl}}$ (2) Toluene $\xrightarrow[\text{(ii) SOCl}_2]{\text{(i) KMnO}_4, \text{KOH}, \Delta}$ (3) Benzene $\xrightarrow[\text{anhyd. AlCl}_3]{\text{CH}_3\text{Cl}}$ (4) Aniline $\xrightarrow[273-278 \text{ K}]{\text{NaNO}_2/\text{HCl}}$ (5) Phenol $\xrightarrow{\text{Zn}, \Delta}$ (A) P \rightarrow 2; Q \rightarrow 4; R \rightarrow 1; S \rightarrow 3(B) P \rightarrow 1; Q \rightarrow 3; R \rightarrow 5; S \rightarrow 2(C) P \rightarrow 3; Q \rightarrow 2; R \rightarrow 1; S \rightarrow 4(D) P \rightarrow 3; Q \rightarrow 4; R \rightarrow 5; S \rightarrow 2

Answer: D

END OF THE QUESTION PAPER