


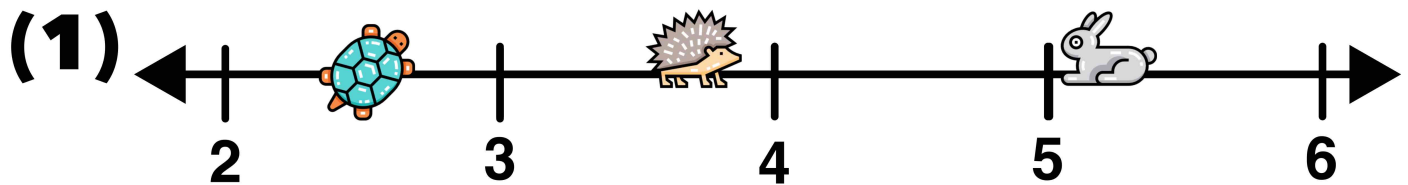





Name: _____



TWO TRUTHS & ONE LIE!

**Which of the three statements below is a lie?
Explain how you made your choice.**

 = $3\frac{3}{5}$  = $5\frac{1}{4}$  = $2\frac{1}{2}$



(2)  +  < 

(3) $7\frac{3}{4} =$  + 

KEY

Statement 2 is a lie!



Want 100+ More 2T1L Math Activities for Grades 3-8?

You can now get our best-selling workbooks:

101 'Two Truths and One Lie!' Math Activities for Grades 3-5

101 'Two Truths and One Lie!' Math Activities for Grades 6-8

As a PDF e-Book by visiting: www.mashupmath.com/shop

And a paperback workbook on Amazon!

